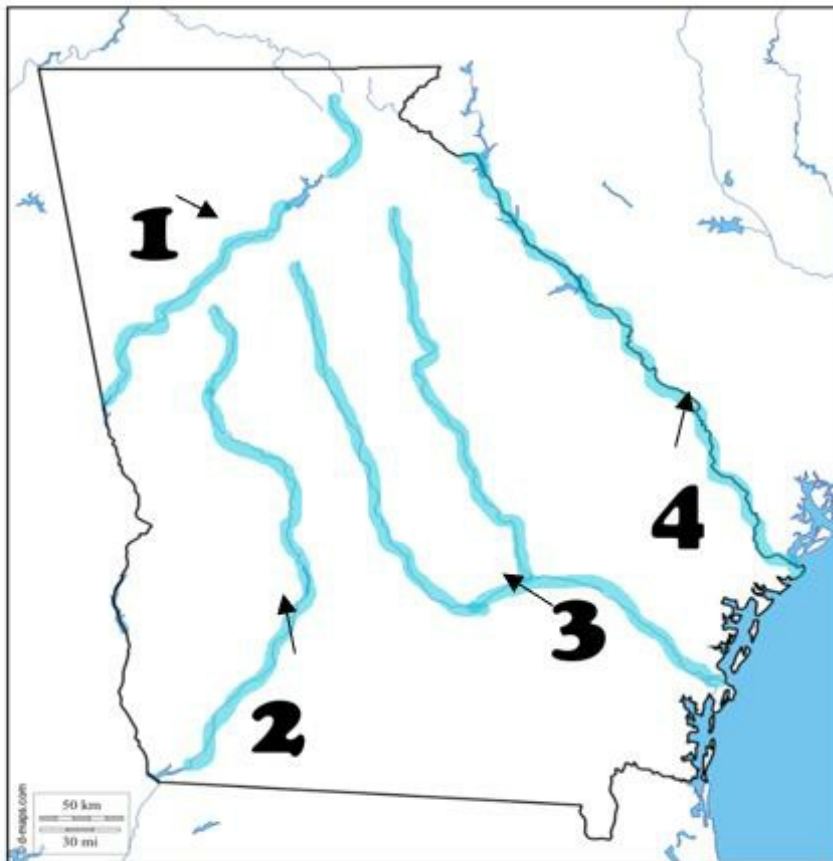


Student Name: _____
Student _____
Instructions:

Test ID: 198083816280420
Description: Georgia Mapping

1. Look at the map.



Where is the Savannah River located?

- A. 1
- B. 2
- C. 3
- D. 4

2.



Which bordering state is # 3?

- A. Alabama
- B. North Carolina
- C. South Carolina
- D. Tennessee
- E. Florida

3. Georgia is located in the following hemispheres:

- A. Southern and Western
- B. Northern and Western
- C. Southern and Eastern
- D. Northern and Eastern

4. When describing Georgia in relation to the rest of the United States, it would be correct to say Georgia is in which region?

- A. Northeast
- B. Northwest
- C. Southwest
- D. Southeast

5.



Which bordering state is # 5?

- A. Alabama
- B. North Carolina
- C. South Carolina
- D. Tennessee
- E. Florida

6.



Which bordering state is # 4?

- A. Alabama
- B. North Carolina
- C. South Carolina
- D. Tennessee
- E. Florida

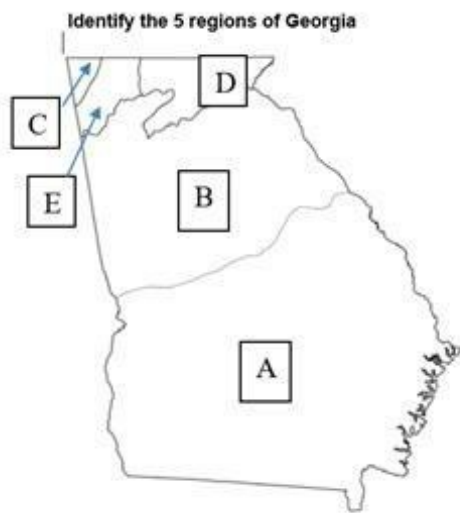
7.



Which bordering state is # 2?

- A. Alabama
- B. North Carolina
- C. South Carolina
- D. Tennessee
- E. Florida

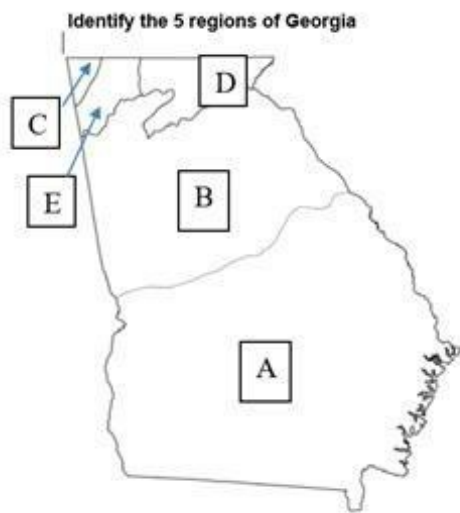
8.



Which region is indicated with the letter B?

- A. Appalachian Plateau
- B. Blue Ridge
- C. Coastal Plain
- D. Piedmont

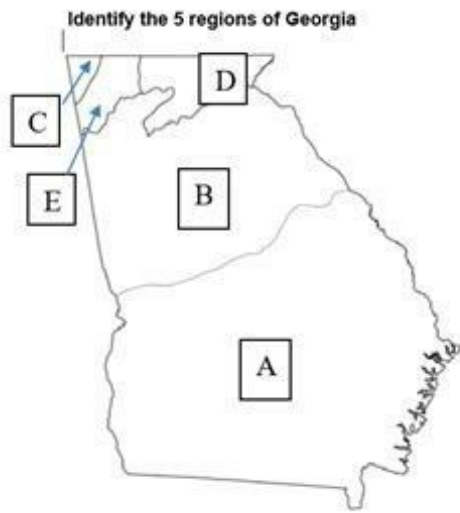
9.



Which region is indicated with the letter C?

- A. Appalachian Plateau
- B. Blue Ridge
- C. Coastal Plain
- D. Piedmont

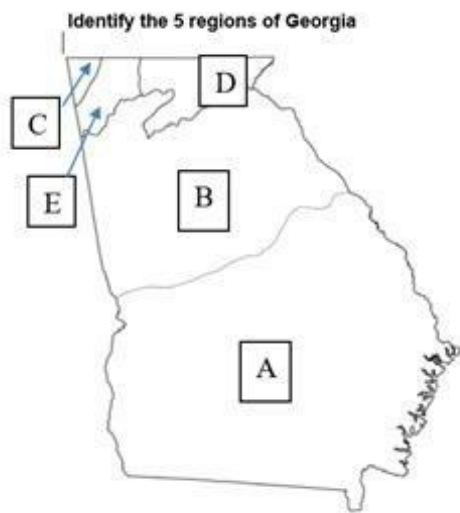
10.



Which region is indicated with the letter E?

- A. Appalachian Plateau
- B. Blue Ridge
- C. Valley and Ridge
- D. Piedmont

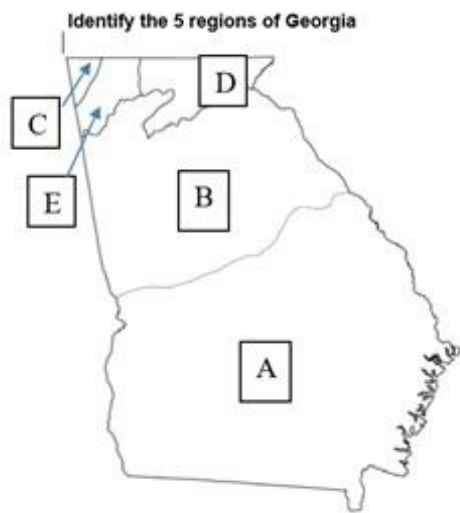
11.



Which region is indicated with the letter D?

- A. Appalachian Plateau
- B. Blue Ridge
- C. Coastal Plain
- D. Piedmont

12.



Which region is indicated with the letter A?

- A. Appalachian Plateau
- B. Blue Ridge
- C. Coastal Plain
- D. Piedmont

13.



Which bordering state is # 1?

- A. Alabama
- B. North Carolina
- C. South Carolina
- D. Tennessee
- E. Florida

14. Why is the Chattahoochee River important to Georgia?

- A. It is the primary mode of transportation between Georgia, Alabama, and Florida.
- B. It provides several areas of the state with drinking water and recreational activities.
- C. Savannah uses it for the city's deepwater port.
- D. There are no other rivers that run through the middle of the state.

- 15.** What is the natural boundary (physical feature) that separates the Coastal Plains from the Piedmont region?
- A. Okefenokee Swamp
 - B. Appalachian Mountains
 - C. Fall Line
 - D. Atlantic coastline